


MATEMATIČKA

PPIČA



1) Banka u Hrvatskoj ima 1.253.431 eura, banka u Sloveniji ima 1.023.001 eura a banka u Francuskoj ima 3.532.123 eura. a) Za koliko eura Francuska ima više nego Hrvatska? b) Koliko bi to bilo eura kad bi zbrojili novac od sve tri banke?

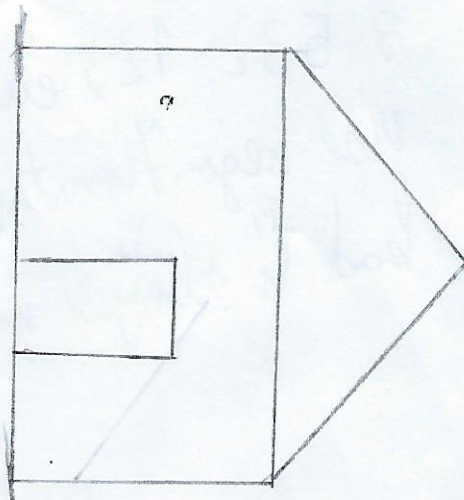


2. Pomozite Perici doraziti oblike (simetrijom)


a)




b)



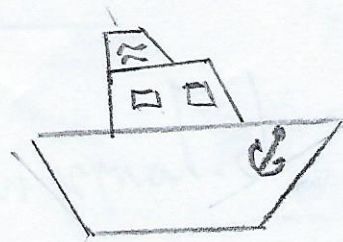
c)



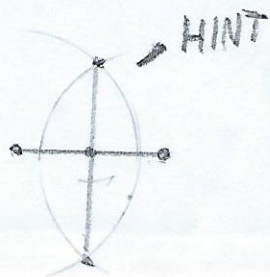
d)



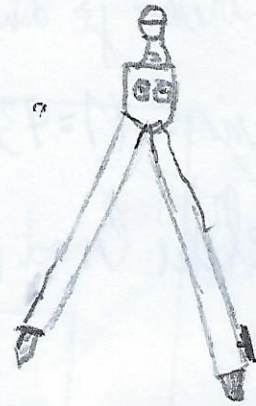
3. Koliko je dukas potrošio kuna ako je kupio:
3X aviona (1=73 kn) 2X tenka (1=100 kn)
1X veliki brod (1=423 kn) i 10X figurica (1=25 kn)?



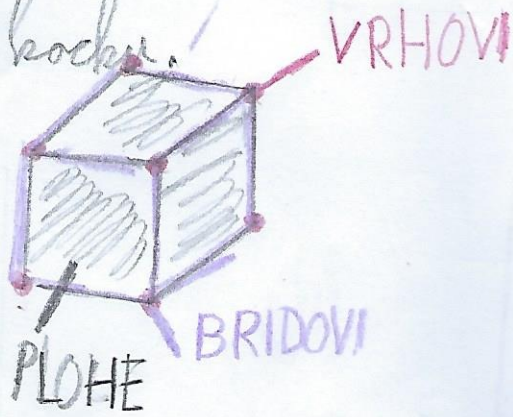
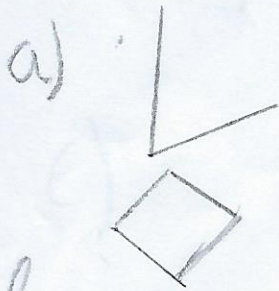
4. Maja je dobila zadatak da osredi sredinu dužine \overline{AB} . (koristi žestar)




5. Pomogni Ani nacerati trokut $a = 5\text{cm}$ (koristi šestar).



6. Lani nacerati kocku.




7. U Petrove kupali stane 1225 dl. Kad se htio kupati
ispala mu je kutija sa igračkama 523 dl je ispalo van kade.
Koliko je ostalo vode?



Odgovori

1. a) 2 278 692 € ✓ b) 5 808 555 €


2.



3.

akcion = 219 kn tenk = 200 kn brod = 423
figurica = 250 ukupno = 1 092 kn

4.



5.



6.
a)



7. 702 dl